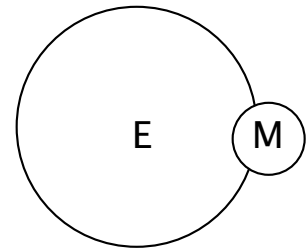
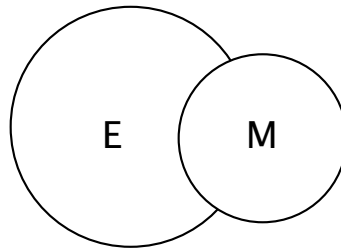
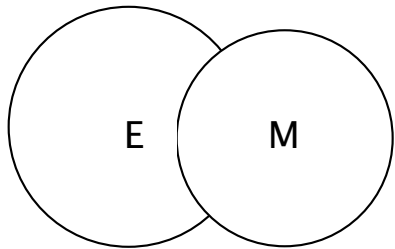


Student Name _____ Date _____

WHAT DO YOU KNOW ABOUT MARS?

Complete the following worksheet.

1. Circle the picture below that best represents the size relationship between the Earth and Mars?



2. True or False Humans have been to Mars.
3. Mars is the _____ planet from the Sun.
4. Write 5 words that describe the planet Mars and its features.
5. Can human beings live comfortable on Mars? Why or why not?